

# Daily Math

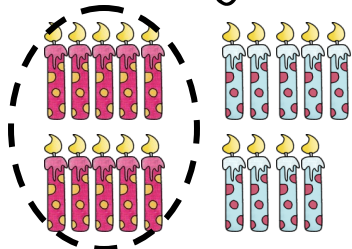
Common Core




Name \_\_\_\_\_

\_\_\_\_\_/10

How many candles?




Stacy blew up 12 balloons. She let 5 float away. How many does she have left?



<input type="text"/>	-	<input type="text"/>	=	<input type="text"/>	<input type="text"/>
----------------------	---	----------------------	---	----------------------	----------------------



Which line is the tallest?



Line 1

Line 2

Nanci saw 2 animals.



Circle which animal she saw fewer of.

Add.

$$\begin{array}{r} 5 \\ + 4 \\ \hline \end{array}$$

$$\begin{array}{r} 4 \\ + 9 \\ \hline \end{array}$$

Subtract.


$$\begin{array}{r} 19 \\ - 4 \\ \hline \end{array}$$

$$\begin{array}{r} 9 \\ - 4 \\ \hline \end{array}$$

Write this number using digits.

nineteen


Circle the time on the digital clock.



9:00

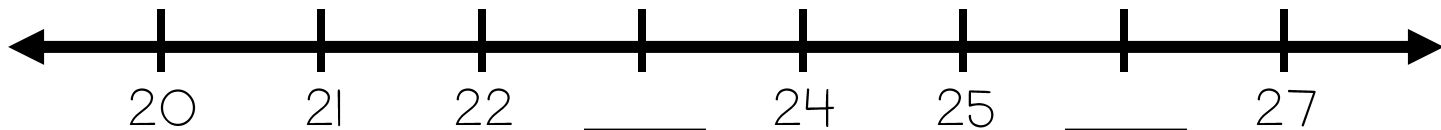
7:00

Circle even or odd.



even

odd



# Daily Math

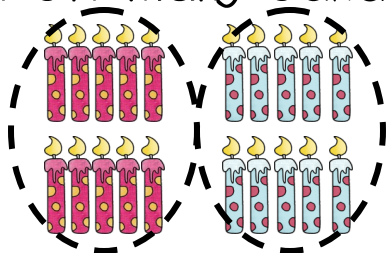
Common Core



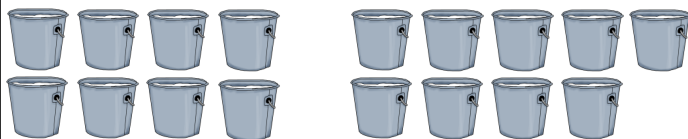
Name \_\_\_\_\_

\_\_\_\_\_/10

How many candles?




Sal milked 8 cows before lunch and 9 after lunch. How many cows were milked?


 -  = 

Which line is the longest?

Line 1



Line 2

Add.

$$\begin{array}{r} 6 \\ + 4 \\ \hline \end{array}$$

$$\begin{array}{r} 4 \\ + 10 \\ \hline \end{array}$$

Alan saw 2 animals.



Circle which animal he saw fewer of.

Subtract.


$$\begin{array}{r} 14 \\ - 4 \\ \hline \end{array}$$

$$\begin{array}{r} 15 \\ - 4 \\ \hline \end{array}$$

Write this number using digits.

twenty


Circle the time on the digital clock.



**8:00**

**3:00**

Circle even or odd.



even

odd

