


Subtraction: Writing equations (take from)



8.4


Write an equation to match each picture.

a.



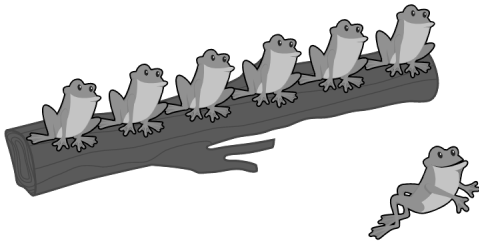
$$\boxed{7} - \boxed{2} = \boxed{}$$

b.




$$\boxed{} - \boxed{} = \boxed{}$$

c.




$$\boxed{} - \boxed{} = \boxed{}$$

d.




$$\boxed{} - \boxed{} = \boxed{}$$

e.



$$\boxed{} - \boxed{} = \boxed{}$$

f.



$$\boxed{} - \boxed{} = \boxed{}$$