





Write an equation to match each picture.

a.




$$\begin{array}{|c|} \hline \\ \hline \\ \hline \\ \hline \\ \hline \end{array} + \begin{array}{|c|} \hline \\ \hline \\ \hline \\ \hline \\ \hline \end{array} = \begin{array}{|c|} \hline \\ \hline \\ \hline \\ \hline \\ \hline \end{array}$$

b.




$$\begin{array}{|c|} \hline \\ \hline \\ \hline \\ \hline \\ \hline \end{array} + \begin{array}{|c|} \hline \\ \hline \\ \hline \\ \hline \\ \hline \end{array} = \begin{array}{|c|} \hline \\ \hline \\ \hline \\ \hline \\ \hline \end{array}$$

c.




$$\begin{array}{|c|} \hline \\ \hline \\ \hline \\ \hline \\ \hline \end{array} + \begin{array}{|c|} \hline \\ \hline \\ \hline \\ \hline \\ \hline \end{array} = \begin{array}{|c|} \hline \\ \hline \\ \hline \\ \hline \\ \hline \end{array}$$

d.



$$\begin{array}{|c|} \hline \\ \hline \\ \hline \\ \hline \\ \hline \end{array} + \begin{array}{|c|} \hline \\ \hline \\ \hline \\ \hline \\ \hline \end{array} = \begin{array}{|c|} \hline \\ \hline \\ \hline \\ \hline \\ \hline \end{array}$$

e.



$$\begin{array}{|c|} \hline \\ \hline \\ \hline \\ \hline \\ \hline \end{array} + \begin{array}{|c|} \hline \\ \hline \\ \hline \\ \hline \\ \hline \end{array} = \begin{array}{|c|} \hline \\ \hline \\ \hline \\ \hline \\ \hline \end{array}$$